

(2 pts) Name: _____

AME 3623: Embedded Real-Time Systems: Final Exam

May 10, 2011

- This examination booklet has 18 pages.
- Write your name at the top of this page and sign your name below.
- The exam is closed book, closed notes, and closed electronic device. The exception is that you may have one page of your own notes.
- The exam is worth a total of 200 points (and 20% of your final grade).
- Explain your answers clearly and be concise. Do not write long essays (even if there is a lot of open space on the page). A question worth 5 points is only worth an answer that is at most 1.5 sentences.
- You have 2 hours to complete the exam. Be a smart test taker: if you get stuck on one problem go on to the next. Don't waste your time giving details that the question does not request. Points will be taken off for answers containing extraneous information.
- Show your work. Partial credit is possible, but only if you show intermediate steps.

Problem	Topic	Max	Grade
0	Name	2	
1	Interrupt Service Routines and Digital I/O	35	
2	Number Representation and Arithmetic	20	
3	Finite State Machines	45	
4	Device Control	30	
5	Analog Processing	45	
6	Microprocessors	25	
7	Extra Credit	10	
Total		212	

On my honor, I affirm that I have neither given nor received inappropriate aid in the completion of this exam.

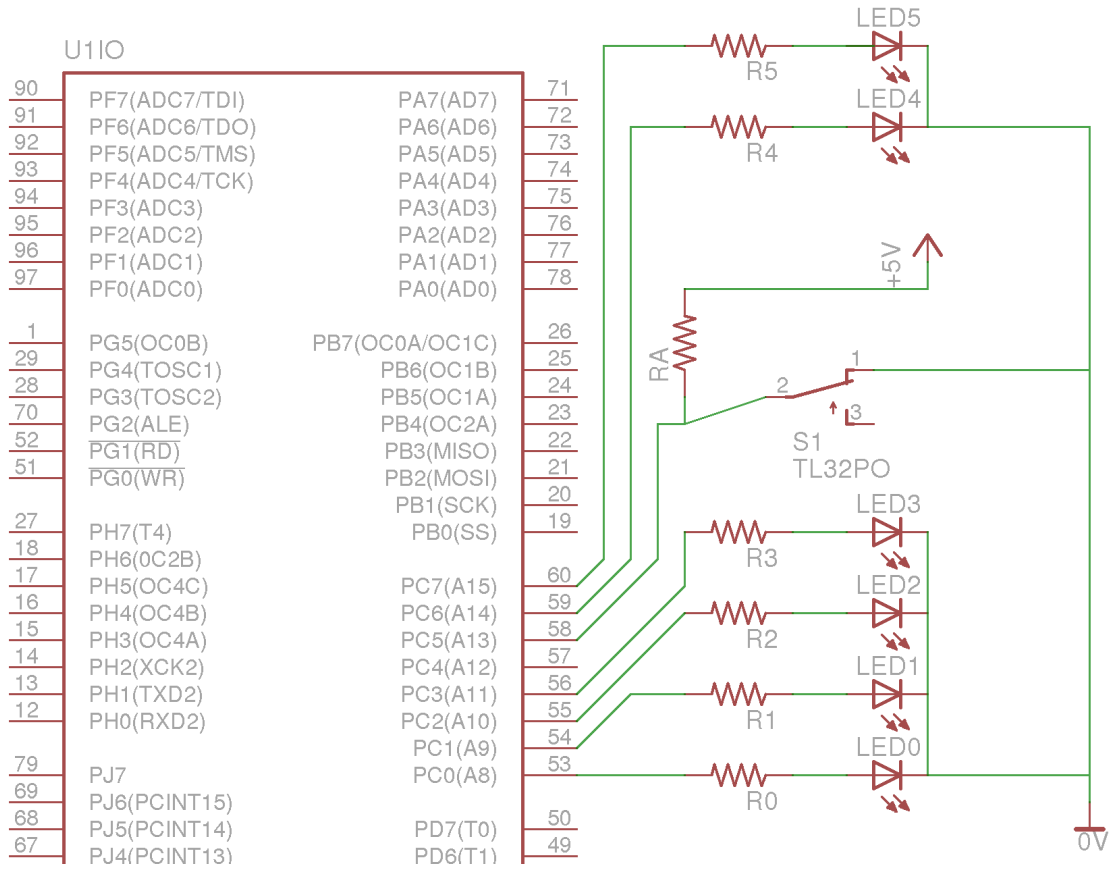
Signature: _____

Date: _____

1. Interrupt Service Routines and Digital I/O

(35 pts)

Carefully consider the following circuit:



And consider the following program:

```
ISR(TIMER2_OVF_vect) {
    static uint16_t counter = 0;

    if((counter / 3) == 1) {
        PORTC |= 0x40;
        PORTC ^= 0x80;
    }else{
        PORTC &= ~0x40;
    }

    PORTC ^= 0x02;

    ++counter;

    if(counter == 8)
        counter = 0;
}

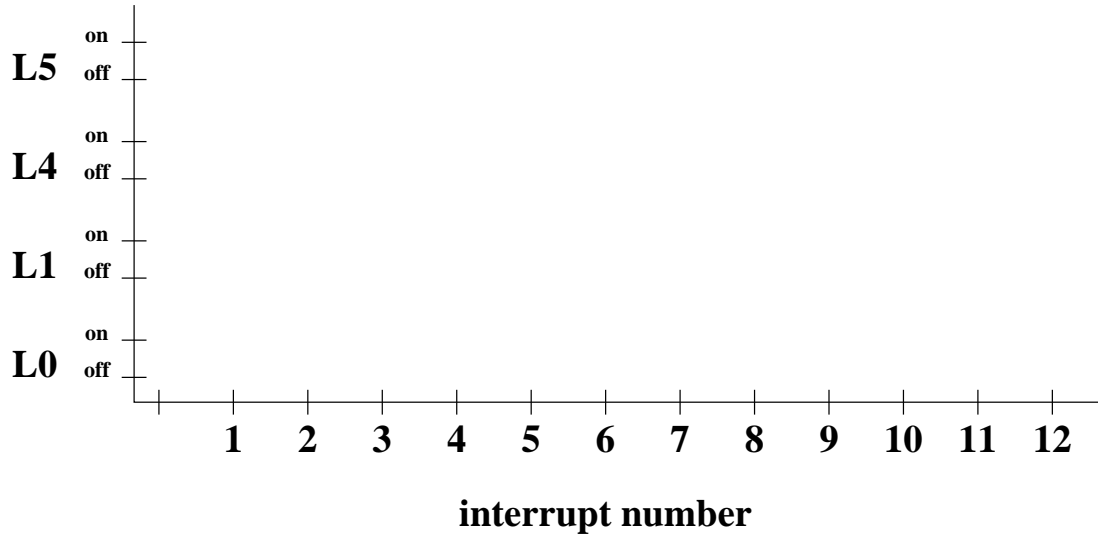
int main(void) {
    DDRC = 0xCF;
    PORTC = 0;
    timer2_config(TIMER2_PRE_128);
    timer2_enable();
    sei();

    while(1) {
    }
}
```

(a) (5 pts) Assuming a system clock of $16MHz$, at what frequency is the timer 2 counter incrementing? (yes, work out the long division by hand)

(b) (5 pts) At what frequency is the timer 2 overflow interrupt being generated? (set up the ratio only)

(c) (20 pts) Show the state of LEDs 0, 1, 4 and 5 as a function of interrupt number for interrupts 1 through 12.



(d) (5 pts) What is the flashing frequency of LED 1? (set up the ratio)

2. **Number Representation and Arithmetic**

(20 pts)

(a) (5 pts) What is the binary equivalent of hexadecimal 35? Show your work.

(b) (5 pts) What is the binary equivalent of hexadecimal -35 in 8-bit two's complement? Show your work.

(c) (5 pts) Compute $47 - 0x35$ using binary arithmetic. Show your work and give your answer in binary two's complement.

(d) (5 pts) What is the decimal equivalent of the above result?

3. Finite State Machines and Control

(45 pts)

Consider the problem of controlling the traffic lights for an intersection between a road oriented North/South and another road oriented East/West. The rules of behavior are as follows:

- Each of the light displays can show *red*, *yellow*, or *green*.
- The North- and South-facing lights show the same color.
- The East- and West-facing lights show the same color.
- The “green direction” only changes if a car is detected as waiting at the opposing red light. A light must be green at least 30 seconds before going yellow in response to a detected car.
- If the lights in one direction are green or yellow, then the opposite direction **must** be red.
- A light must be yellow for 20 seconds before changing to red.
- After a light has changed to red, the opposing light turns green after 15 more seconds.
- Any time that an “emergency” signal is received, any green light must immediately transition to yellow and then, after 20 seconds, to red.
- After the emergency signal has been removed, the light sequence rules return to normal operation.

Note: the FSM must explicitly handle the timing of its actions.

The actions are as follows:

- $L_{ns} = R$
- $L_{ns} = Y$
- $L_{ns} = G$
- $L_{ew} = R$
- $L_{ew} = Y$
- $L_{ew} = G$
- RESET timer

(a) (5 pts) What are the events?

(b) (20 pts) Draw the corresponding FSM

Hint: you only need the states below.

NS:G

NS:Y

NS:R

HOLD

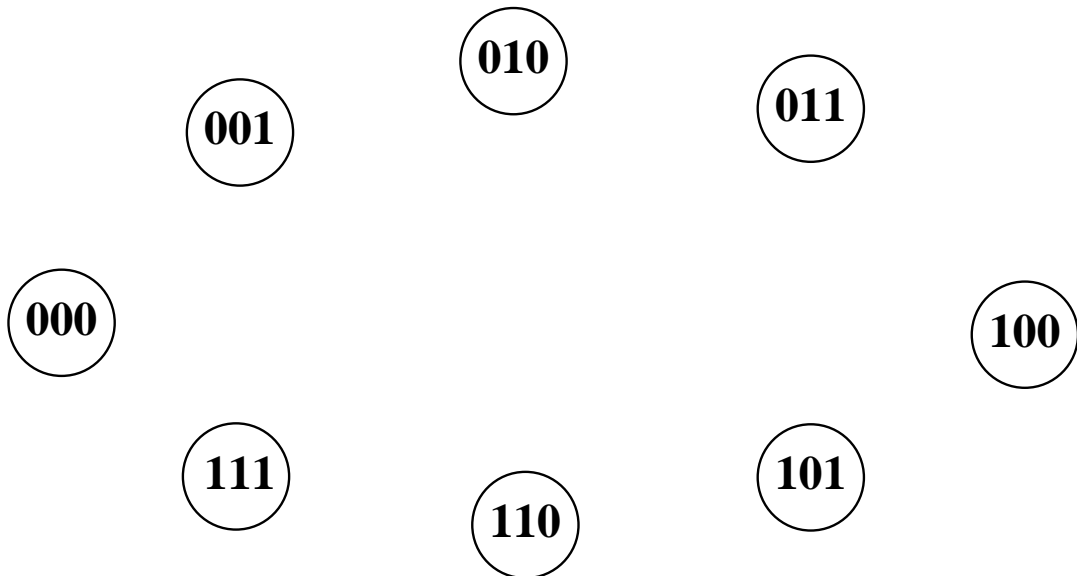
EW:R

EW:Y

EW:G

Consider a FSM whose state is described by a three-bit binary number (i.e., there are 2^3 states). This finite state machine has two possible events: XOR with 0x2 (X) and ADD 3 (A).

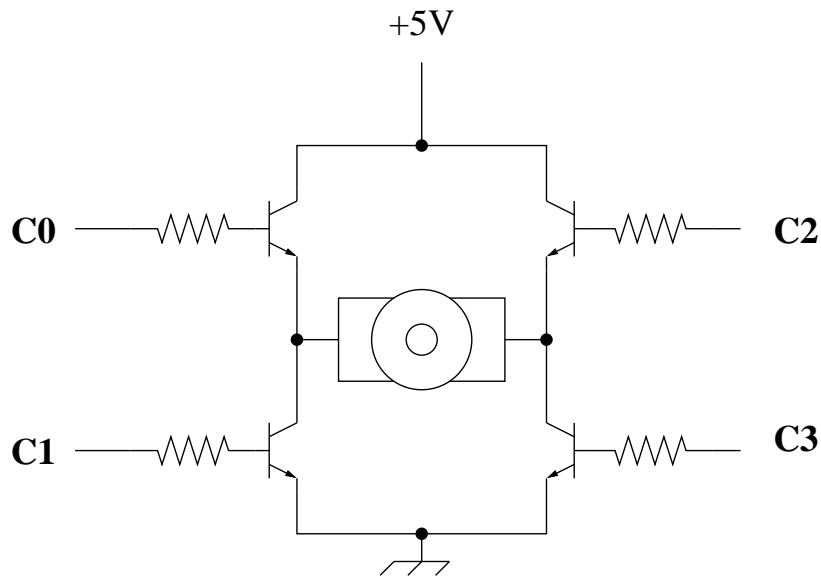
- (c) (20 pts) Draw the FSM diagram that describes the behavior of this device when the different events occur (don't worry about actions in this case).



4. Device Control

(30 pts)

Given the following H-bridge circuit:



(a) (10 pts) Briefly explain the constraints on the chosen **logical** values of C_0 , C_1 , C_2 , and C_3 for safe operation of the H-bridge.

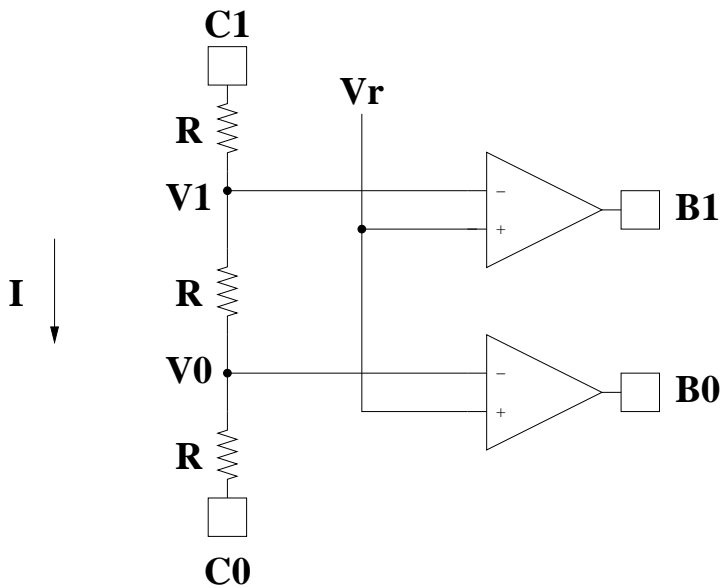
(b) (10 pts) Briefly describe how motor torque direction is controlled with this circuit.

(c) (10 pts) Briefly describe how torque magnitude is controlled in this circuit.

5. Analog Processing

(45 pts)

Consider the following circuit:



C_1 and C_0 are logical values determined by your Atmel Mega processor (i.e., 0 and 1). The voltage at pin i is $5C_i$. B_1 and B_0 are inputs into the processor. Assume that the operational amplifiers produce an output of $0V$ or $5V$.

(a) (15 pts) For each combination of C_1 and C_0 , derive the voltage at points V_1 and V_0 .

C_1	C_0	V_1	V_0
0	0		
0	1		
1	0		
1	1		

(b) (5 pts) Assume that $V_r = 7/3 V$ and $C_1, C_0 = 01$. What are B_1 and B_0 ?

(c) (5 pts) Assume that $V_r = 11/3 V$ and $C_1, C_0 = 11$. What are B_1 and B_0 ?

(d) (5 pts) Assume that a 5-bit digital-to-analog converter in which the minimum voltage is zero Volts and the maximum voltage is 5 Volts. What is the digital value that corresponds to 1 Volt? (give the fraction only)

- (e) (15 pts) Assume that a 5-bit analog-to-digital converter is presented with an input voltage of $120/31 V$. Show the sequence of guesses that the successive approximation algorithm goes through in order to determine the equivalent binary representation.

- (d) (10 pts) Give four examples of special-purpose registers in the Atmel Mega processors and briefly describe their function.

7. Extra Credit

(10 pts)

(10 pts) (credit to Click & Clack) You are presented with seven stacks of 70 coins each. Each stack is composed of either genuine or counterfeit coins (all coins in a stack are the same). A genuine coin weighs 10 grams; a counterfeit coin weighs 11 grams. You have a scale that is accurate to 0.1 grams. Describe a scheme in which you can determine which stacks are genuine and which are counterfeit using a single weighing.

Hints:

- From a given stack, you may select any number of coins to include in the weighing.
- The solution to this problem is related to your implementation of `get_orientation()`, with binary numbers replacing hexadecimal numbers.