

CS 2334: Programming Structures and Abstractions: Exam 1
October 3, 2016

General instructions:

- Please wait to open this exam booklet until you are told to do so.
- This examination booklet has 13 pages. You also have been issued a bubble sheet.
- Fill in the identifying information below (signature, name, ID and date) Also, write your name and ID number on your bubble sheet, and fill in the bubbles for your ID.
- You may have up to five pages of your own notes. No electronic devices or books may be used.
- The exam is worth a total of 137 points. Your grade counts for 10% of your final grade.
- You have 1.25 hours to complete the exam. Be a smart test taker: if you get stuck on one problem go on to the next.
- Use your bubble sheet to answer all multiple-choice questions. Make sure that the question number and the bubble row number match.
- Other than **this** page, you may tear any other page out of this booklet that does not contain numbered answers.
- If you cannot effectively erase erroneous answers from the bubble sheet, please clearly cross them out.

On my honor, I affirm that I have neither given nor received inappropriate aid in the completion of this exam.

Signature: _____ **Name:** _____

ID Number: _____ **Date:** _____

C A B C C A B B A C B

Question	Points	Score
Types and Objects	32	
Inheritance and Polymorphism	35	
UML and Object Oriented Design	14	
Abstract Classes and Interfaces	24	
Exceptions and Error Handling	28	
Miscellaneous	4	
Total:	137	

Part I. Types and Objects

1. (4 points) What is printed by this block of code?

```
1   int a = 4;
2   double c = 11;
3   int b = c+7;
4   c += b;
5   System.out.println(c);
```

- A. 15.0 B. 18.0 C. 22.0 D. 29.0
E. **Compilation error or answer not shown**

2. (4 points) What is printed by this block of code?

```
1   String s1 = "XHT";
2   String s2 = "xHt";
3   s2.toUpperCase();
4   if(s1.equals(s2))
5   {
6       System.out.println("Yes:" + s1);
7   }
8   else
9   {
10      System.out.println("No:" + s2);
11  }
```

- A. **No:xHt** B. No:XHT C. Yes:xHt D. Yes:XHT
E. Compilation error or answer not shown

3. (4 points) What is printed by this block of code?

```
1   int i1 = 7;
2   int i2 = 5;
3   System.out.println(i1/i2);
```

- A. 0 B. **1** C. 1.4 D. 12 E. Compilation error or answer not shown

4. (4 points) What is printed by this block of code?

```
1   int i1 = 42;
2   String s = "8";
3   System.out.println(i1 + s);
```

- A. 6 B. 50 C. **428** D. 842 E. Compilation error or answer not shown

5. (4 points) What is printed by this block of code?

```
1   int a = 32;
2   String b = "4EB";
3   int c = 8;
4   System.out.println(a + c + b);
```

- A. 324EB8 B. 3284EB C. **404EB** D. 84EB32
E. Compilation error or answer not shown

6. (4 points) What is printed by this block of code?

```
1   int a = 17;
2   String b = "YYO";
3   int c = 22;
4   System.out.println(b + c + a);
```

- A. YY39 B. YYO39 C. YYO1722 D. **YYO2217**
E. Compilation error or answer not shown

7. (4 points) What is printed by this block of code?

```
1   int a = 3;
2   int b = 7;
3   String c = "7117";
4   System.out.println(c + (a + b));
```

- A. 7127 B. **711710** C. 711737 D. 711773
E. Compilation error or answer not shown

8. (4 points) What is printed by this block of code?

```
1   String a = "OOM";
2   Integer b = -5;
3   Integer c = new Integer(19);
4   System.out.println(c + b + a);
```

- A. **14OOM** B. 19-5M C. 19-5OOM D. -519OOM
E. Compilation error or answer not shown

Part II. Inheritance and Polymorphism

Consider the following class definitions:

```
public class A
{
    private int val;

    public A(int val) {
        this.val = val;
    }

    public int getVal() {
        return val;
    }

    public String toString() {
        return "A:" + this.getVal();
    }
}

public class B extends A
{
    private String name;

    public B(int val, String name) {
        super(val);
        this.name = name;
    }

    public String getName() {
        return name;
    }
}

public class C extends B
{
    private int val;

    public C(int val, String name) {
        super(val*2, name);
        this.val = val;
    }

    public C(String name, int val) {
        super(val, name.toLowerCase());
        this.val = -1;
    }

    public int getVal() {
        return val;
    }

    public int getSuperVal() {
        return super.getVal();
    }

    public String toString() {
        return "C:" + this.getName() + ":" + super.toString();
    }
}
```

9. (7 points) What is printed by this block of code?

```
C c = new C(83, "Joe");
System.out.println(c);
```

- A. C:Joe:A:-1 B. C:Joe:A:-2 **C. C:Joe:A:83** D. C:Joe:166
E. Answer not shown

10. (7 points) What is printed by this block of code?

```
C e = new C("Ann", 3);
System.out.println(e.getVal() + e.getSuperVal());
```

- A. -1 B. 1 **C. 2** D. 3
E. Answer not shown

11. (7 points) What is printed by this block of code?

```
A a = new A(42);
System.out.println(a);
```

- A. A: **B. A:42** C. A:84 D. A:A:42 E. Answer not shown

12. (7 points) What is printed by this block of code?

```
C d = new C("Henry", 19);
System.out.println(d);
```

- A. C:henry:A:19 B. C:Henry:A:19 **C. C:henry:A:-1** D. C:Henry:A:-1
E. Answer not shown

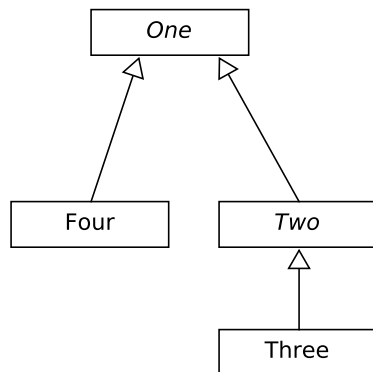
13. (7 points) What is printed by this block of code?

```
B b = new B(79, "Bob");
System.out.println(b);
```

- A. A:79** B. B:79 C. Bob:79 D. B:Bob:79 E. Answer not shown

Part III. UML and Object Oriented Design

14. (4 points) Which set of class definitions corresponds to the following UML diagram?



A.

```
public abstract class One {...}
public abstract class Two extends One {...}
public class Three extends Two {...}
public class Four extends Two {...}
```

B.

```
public interface One {...}
public interface Two implements One {...}
public class Three extends Two {...}
public class Four implements One {...}
```

C.

```
public class One {...}
public class Two extends One {...}
public class Three extends Two {...}
public class Four extends One {...}
```

D.

```
public abstract class One {...}
public abstract class Two extends One {...}
public class Three extends Two {...}
public class Four extends One {...}
```

E. Answer not shown

15. (4 points) **Carefully examine** the following UML models and select the one that corresponds to the following code.

```

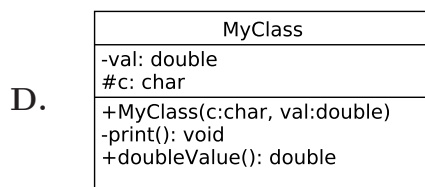
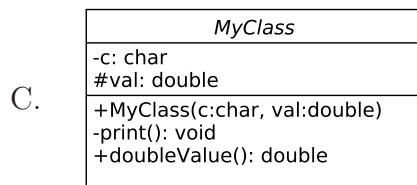
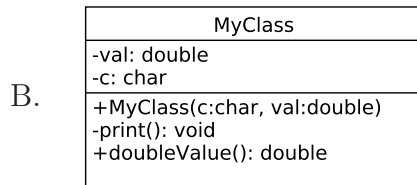
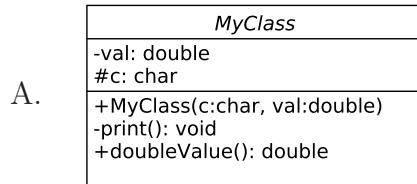
public class MyClass
{
    private double val;
    protected char c;

    public MyClass(char c, double val) {
        this.val = val;
        this.c = c;
    }

    private void print() {
        System.out.println(c);
    }

    public double doubleValue() {
        return val * 2;
    }
}

```



E. Answer not shown

16. (6 points) Which UML diagram corresponds to the following code?

```

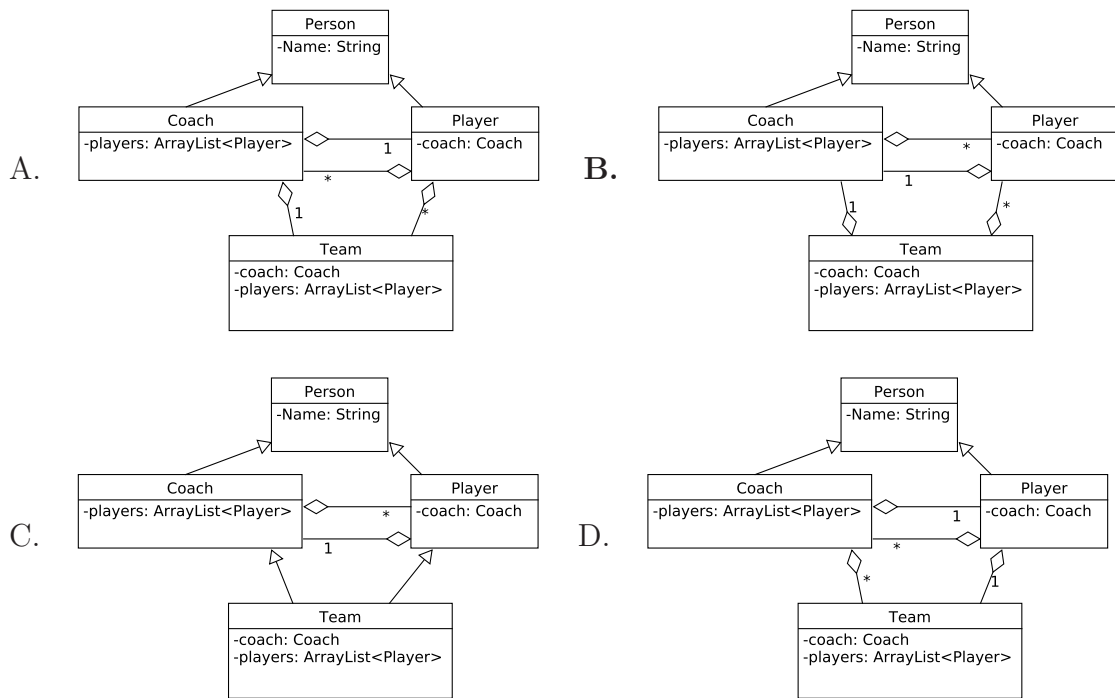
public class Person
{
    private String Name;
}

public class Coach extends Person
{
    private ArrayList<Player> players;
}

public class Player extends Person
{
    private Coach coach;
}

public class Team
{
    private Coach coach;
    private ArrayList<Player> players;
}

```



E. Answer not shown

Part IV. Abstract Classes and Interfaces

17. (4 points) Which line (if any) will cause the program not to compile?

```
1 public interface MyList
2 {
3     public abstract void add(Integer i);
4     public abstract Integer get(int j);
5     public abstract void insert(Integer i, int j);
6 }
```

- A. 1 B. 3 C. 4 D. 5 E. Answer not shown

18. (4 points) Which line (if any) will cause the program not to compile?

```
1 public interface MyInterface
2 {
3     public int value;
4
5     public abstract double setDouble(double v)
6     {
7         value = v;
8     }
9     public abstract String toString();
10 }
```

- A. 3 B. 5 C. 7 D. Multiple lines
E. Answer not shown

19. (4 points) Which line (if any) will cause the program not to compile?

```
1 public abstract class Worker
2 {
3     private double workRate;
4
5     public Worker(double workRate)
6     {
7         this.workRate = workRate;
8     }
9
10    public abstract boolean canDoWork();
11
12    public double doWork()
13    {
14        if(this.canDoWork())
15        {
16            return this.workRate;
17        }
18        else
19        {
20            return 0;
21        }
22    }
23 }
```

- A. 7 B. 10 C. 14 D. 16 E. Answer not shown

20. (4 points) Any class that extends an abstract class must provide implementations for all of the abstract methods.
A. True **B. False** C. Answer not shown

Solution: If the abstract class extends another abstract class, then it may leave some of the interface's methods unimplemented.

Consider the following class definition for the next two questions:

```
1  public class Course implements Comparator<Course>
2  {
3      private String name;
4      private int grade;
5
6      public Course(int name, String grade)
7      {
8          this.name = name;
9          this.grade = grade;
10     }
11
12     /**
13      * Sort first by grade and then by the
14      * natural order of the names.
15      * @return 1 if c1 comes after c2; -1 if c1 comes before c2;
16      *         and 0 if they are equal
17      */
18     public int compare(Course c1, Course c2)
19     {
20         if(c1.grade < c2.grade)
21         {
22             return -1;
23         }
24         else if(c1.grade > c2.grade)
25         {
26             return 1;
27         }
28         else
29         {
30             return c2.name.compareTo(c1.name);
31         }
32     }
33 }
```

21. (4 points) Which one line can be changed to fix a bug in the class definition or the Course constructor?
A. 1 **B. 6** C. 8 D. 9 E. Answer not shown
22. (4 points) Which one line can be changed to fix a bug in the compare() method?
A. 18 B. 20 C. 24 **D. 30** E. Answer not shown

Part V. Exceptions and Error Handling

Consider the following program:

```
public class ExceptionsOnExam
{
    public static int doSubJob(int value)
    {
        if(value <= 5)
        {
            throw new IllegalArgumentException("Error 1");
        }
        else if(value > 8)
        {
            throw new IllegalStateException("Error 2");
        }
        else
        {
            return 42;
        }
    }

    public static int doJob(int arg)
    {
        int value = -1;

        if (arg <= 10 && arg >= 2)
        {
            try
            {
                return doSubJob(arg + value);
            }
            catch(IllegalArgumentException e)
            {
                return value;
            }
        }
        else
        {
            return doSubJob(2 * value);
        }
    }

    public static void main(String[] args)
    {
        int value = ???;

        try
        {
            int ret = doJob(value);
            System.out.println(ret);
        }
        catch (Exception e)
        {
            System.out.println(e.getMessage());
        }
    }
}
```

Note that both *IllegalArgumentException* and *IllegalStateException* are *RuntimeExceptions*.

23. (7 points) Assume that $value = 1$ in `main()`, what is printed by the program?
A. **Error 1** B. Error 2 C. -1 D. 42 E. Answer not shown
24. (7 points) Assume that $value = 7$ in `main()`, what is printed by the program?
A. Error 1 B. Error 2 C. -1 **D. 42** E. Answer not shown
25. (7 points) Assume that $value = 10$ in `main()`, what is printed by the program?
A. Error 1 **B. Error 2** C. -1 D. 42 E. Answer not shown
26. (7 points) Assume that $value = 6$ in `main()`, what is printed by the program?
A. Error 1 B. Error 2 **C. -1** D. 42 E. Answer not shown

Part VI. Miscellaneous

Consider the following program:

```
1  public class MyClass
2  {
3      private double val;
4      protected char c;
5
6      public MyClass(char c, double val) {
7          this.val = val;
8          this.c = c;
9      }
10
11     private void print() {
12         System.out.println(c);
13     }
14
15     public double doubleValue() {
16         return val * 2;
17     }
18
19     public static void main(String[] args)
20     {
21         MyClass m = new MyClass('a', 7.2);
22         int a = 4;
23
24         System.out.println(m + a);
25     }
26 }
```

27. (2 points) In which part of memory is the variable declared on line 4 stored?
A. **Heap** B. Stack C. Answer not shown
28. (2 points) In which part of memory is the variable declared on line 22 stored?
A. Heap B. **Stack** C. Answer not shown